



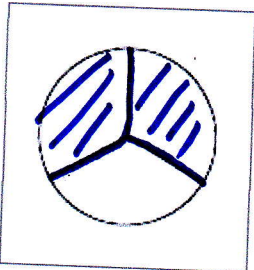
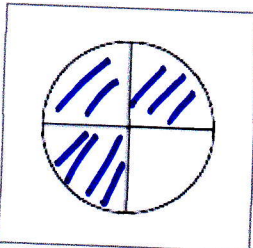

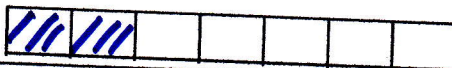



Mathématiques CM1

Exercice n°1 : Quelle fraction de chaque figure représente la partie grise ?

			
$\frac{1}{2}$	$\frac{1}{4}$	$\frac{3}{7}$	$\frac{7}{16}$

Exercice n°2 : Colorie ce que représente chaque fraction.

$\frac{2}{3}$ 	$\frac{3}{4}$ 	$\frac{5}{6}$ 
$\frac{2}{7}$ 	$\frac{3}{10}$ 	

Exercice n°3 : Ecris la fraction en chiffres.

un quart : $\frac{1}{4}$

deux tiers : $\frac{2}{3}$

deux quarts : $\frac{2}{4}$

un demi : $\frac{1}{2}$

trois quarts : $\frac{3}{4}$